


1) How many more apples are there than bananas?




2) How many socks altogether?




3) Add 7 and 5 together.

4) Write 9 in words.



1) Complete the sentence using **longer** or **shorter**.



The crayon is \_\_\_\_\_ than the pencil.

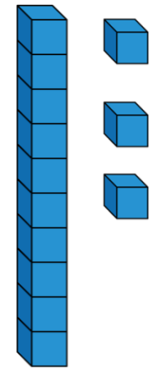
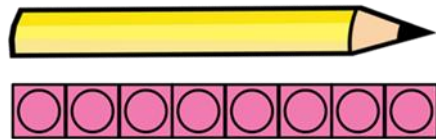
2) Order the numbers from greatest to smallest.

25, 9, 17

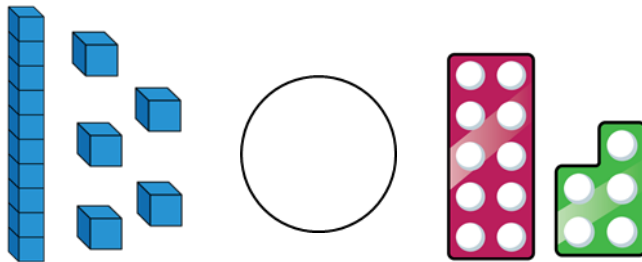
3) Add 8 and 3 together.

4) Write 19 in words.

1) How many cubes long is the pencil?

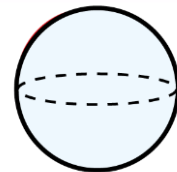


2) Compare using  $<$ ,  $>$  or  $=$

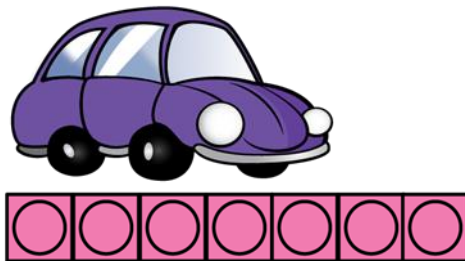


3) What is one less than 45?

4) Find the total of 4 and 8



1) How many cubes long is the car?



2) Which is taller, the house or the tree?


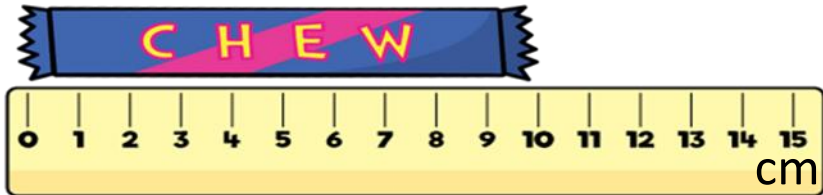


3) Write a 2-digit number that is less than 17

4) What is 5 more than 13?

# Flashback 4

1) How long is the chew bar?



2) Complete the sentence.



The \_\_\_\_\_ is taller than the \_\_\_\_\_.

3) How many cherries altogether?



4) What is  $13 - 4$ ?